


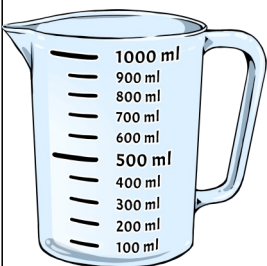
Datum: \_\_\_\_\_

Name: \_\_\_\_\_


1 Wie viele Milliliter sind in den Messbechern?




2 Zeichne richtig ein.




500 ml




300 ml




700 ml



100 ml




900 ml



250 ml



750 ml



1000 ml